

The skills in this series of exercises appear frequently.

These are the GIFTS you must take to succeed.

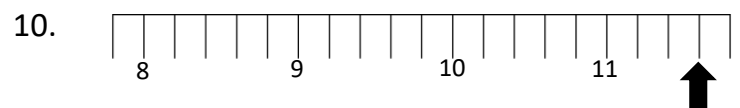
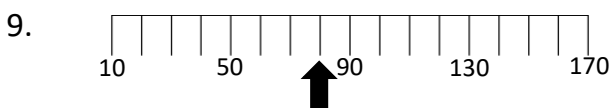
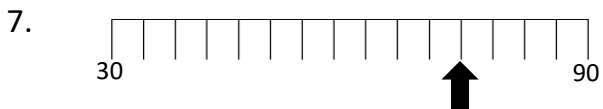
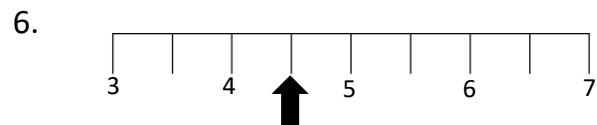
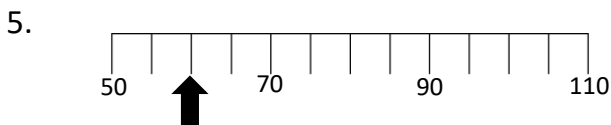
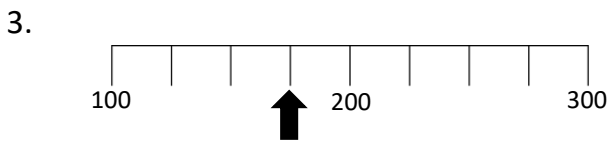
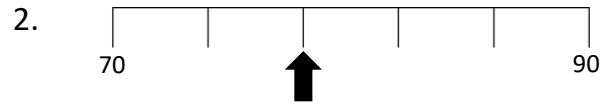


Numeracy Unit

Exercise 10

Reading Scales (Non-Calculator)

Determine the value of the pointer on each scale:



Applying Question



A combi boiler should be between 1.0 and 2.0 bar.

When refilling pressure in his boiler, John notices that he overfilled.

It is recommended only filling the boiler to 1.5 bar.

How much should John drain to make his boiler safe?

