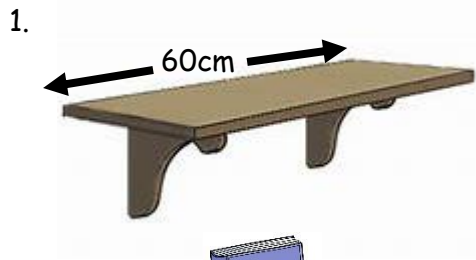


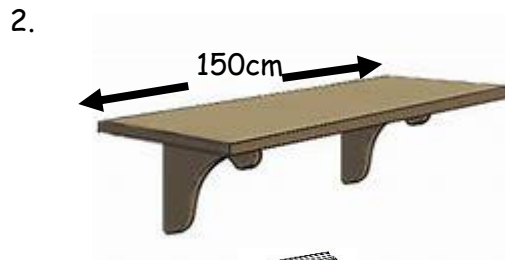

Shelf Packing 1



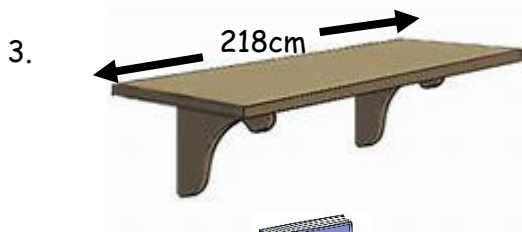
How many books/dvd's can be stored vertically onto each shelf?



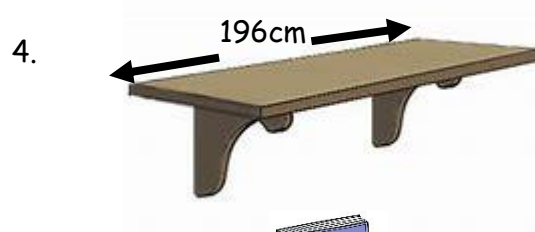
Width 3cm



Width 5cm



Width 4.5cm



Width 6.1cm



5. How many books could you fit on these shelves vertically? (note - there are now three shelves)



a. Book Width 3cm



b. Book Width 4.5cm



c. Book Width 3.25cm

