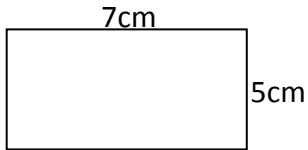


Perimeter, Area and Volume

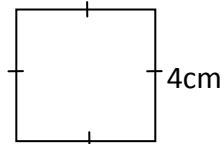
Exercise 1

1 Find the perimeter of each shape:

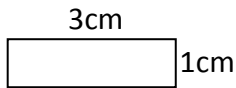
a



b



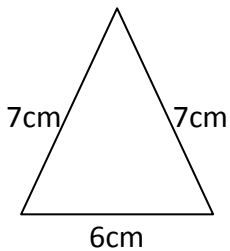
c



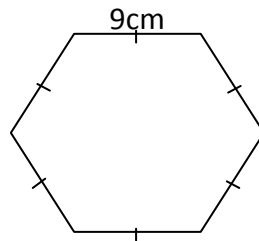
d



e



f



g

