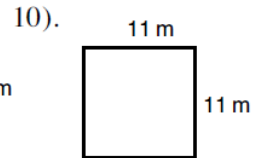
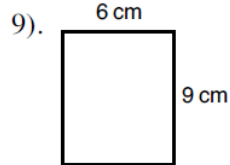
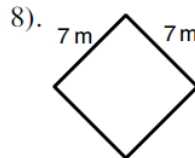
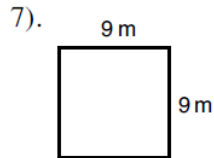
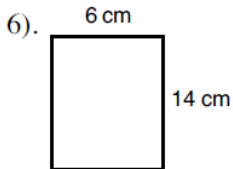
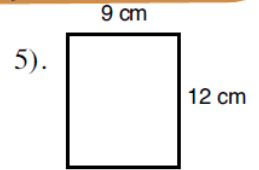
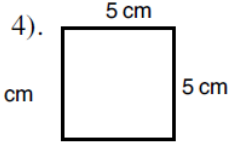
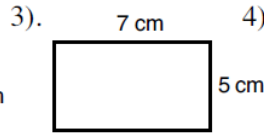
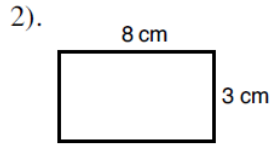
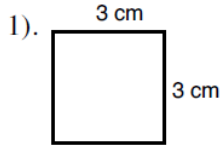


**A**

## Rectangles and Squares.



Find the perimeter and area of the following rectangles and squares.  
Remember to give the units for each answer. (Diagrams are not to scale).

**B**

Find the missing length in the following shapes:

